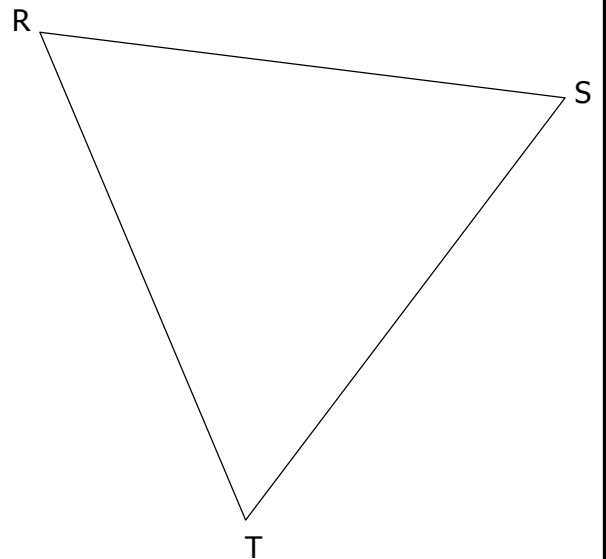
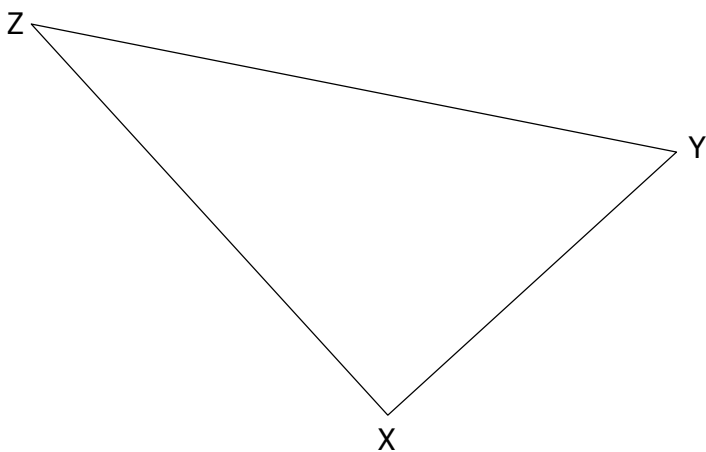
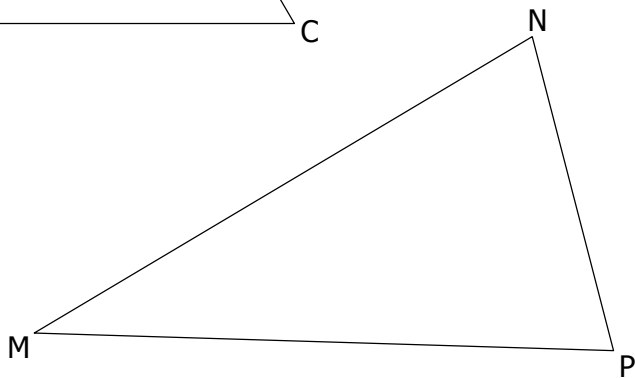
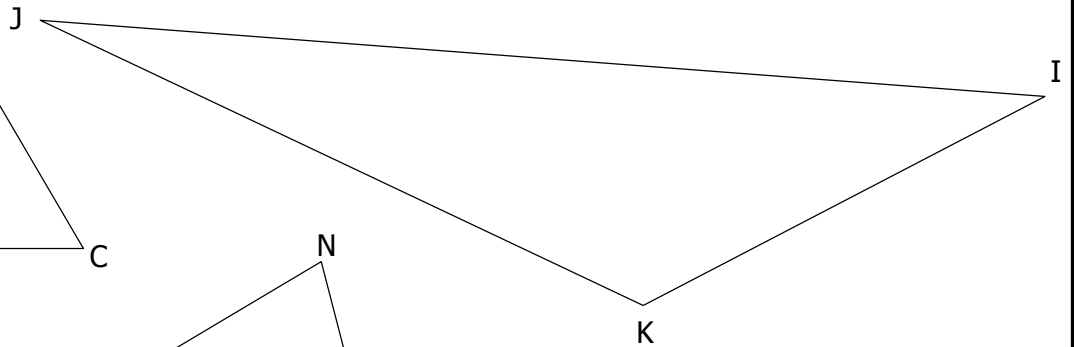
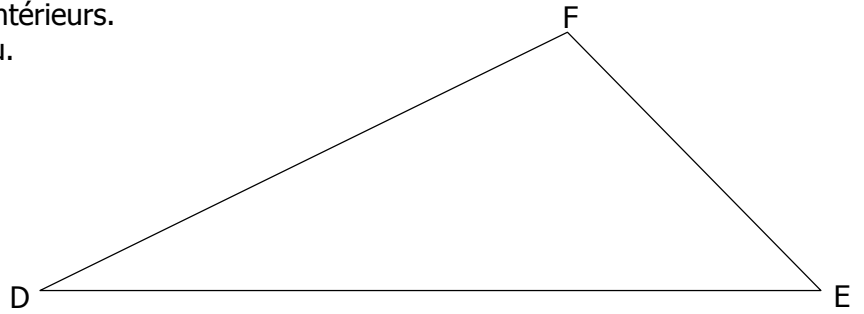
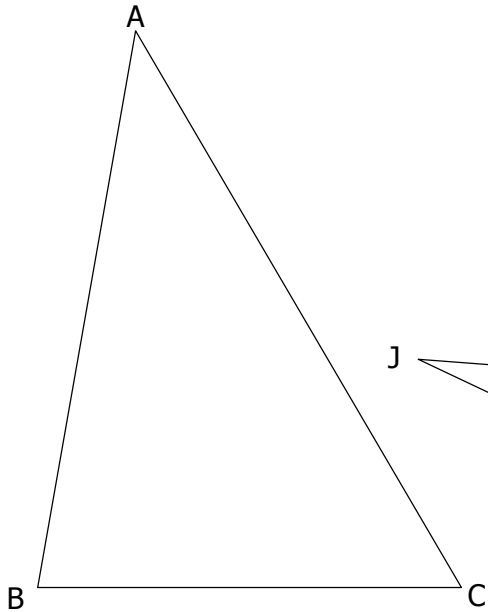


Pour chaque triangle:

- Mesurer (au degrés près) les 3 angles intérieurs.
- Récapituler ces mesures dans le tableau.
- Calculer la somme de ces 3 angles.



$\hat{A} = \dots\dots^\circ$	$\hat{D} = \dots\dots^\circ$	$\hat{I} = \dots\dots^\circ$	$\hat{M} = \dots\dots^\circ$	$\hat{R} = \dots\dots^\circ$	$\hat{X} = \dots\dots^\circ$
$\hat{B} = \dots\dots^\circ$	$\hat{E} = \dots\dots^\circ$	$\hat{J} = \dots\dots^\circ$	$\hat{N} = \dots\dots^\circ$	$\hat{S} = \dots\dots^\circ$	$\hat{Y} = \dots\dots^\circ$
$\hat{C} = \dots\dots^\circ$	$\hat{F} = \dots\dots^\circ$	$\hat{K} = \dots\dots^\circ$	$\hat{P} = \dots\dots^\circ$	$\hat{T} = \dots\dots^\circ$	$\hat{Z} = \dots\dots^\circ$
Somme = $\dots\dots^\circ$	Somme = $\dots\dots^\circ$	Somme = $\dots\dots^\circ$	Somme = $\dots\dots^\circ$	Somme = $\dots\dots^\circ$	Somme = $\dots\dots^\circ$