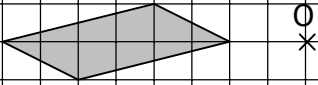

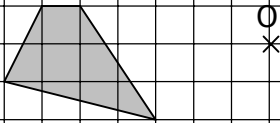
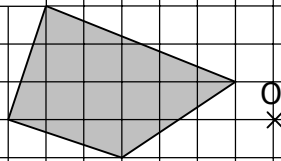
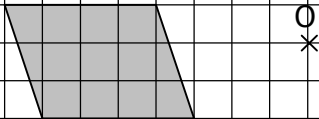
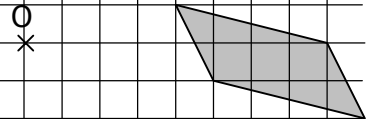
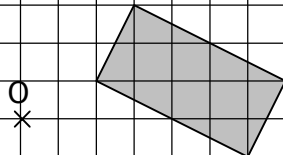
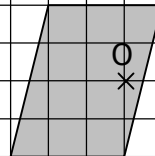
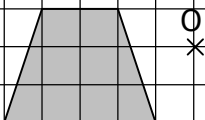
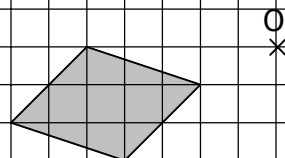
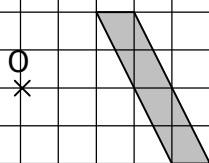


Construire les symétriques de tous ces quadrilatères par rapport au centre O.

**a.****b.****c.****d.****e.****f.****g.****h.****i.****j.****k.****l.**