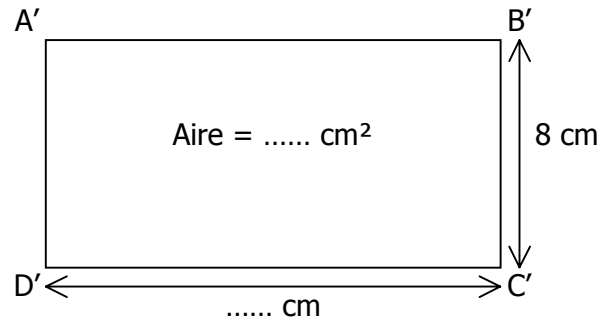
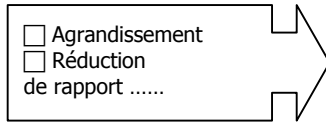
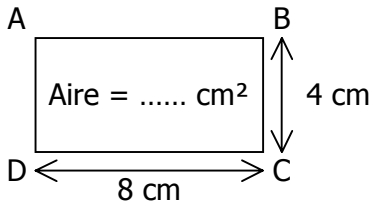
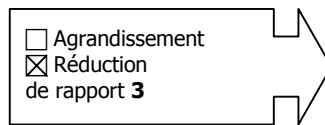
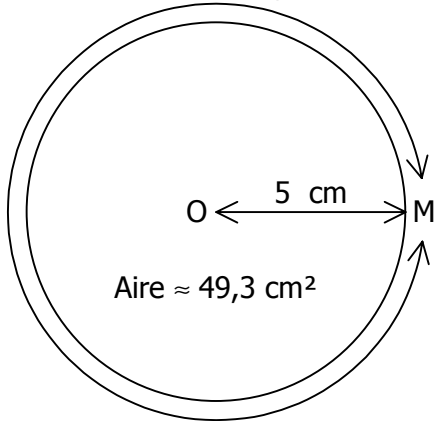


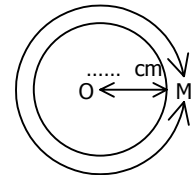
EXERCICE : Trouver les longueurs, les aires et les volumes qui manquent.



Périmètre $\approx 31,4 \text{ cm}$



Périmètre $\approx \dots \text{ cm}$



Aire $\approx \dots \text{ cm}^2$

