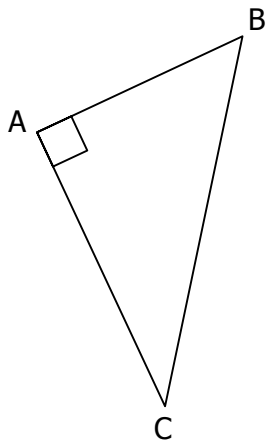


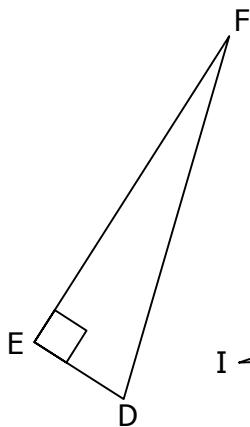
ACTIVITÉ 1.1

Voici 6 triangles rectangles.

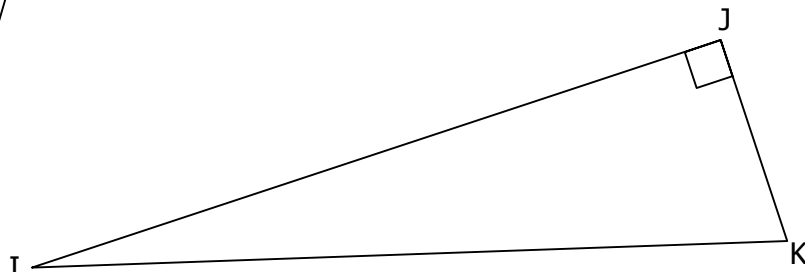
Pour chacun d'entre eux, effectuer les mesures (en cm) et les calculs nécessaires pour compléter les tableaux.



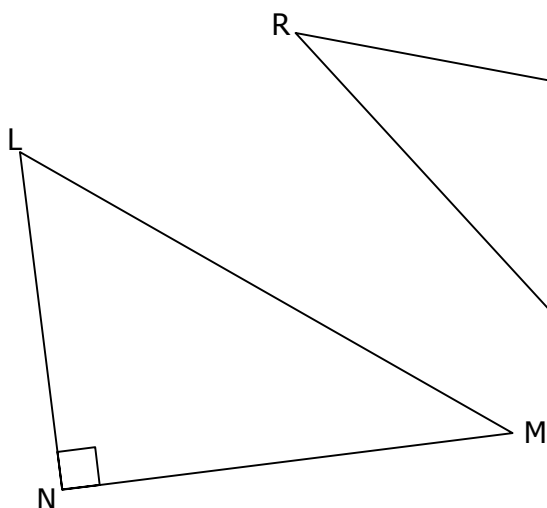
AB =	AB ² =
AC =	AC ² =
BC =	BC ² =



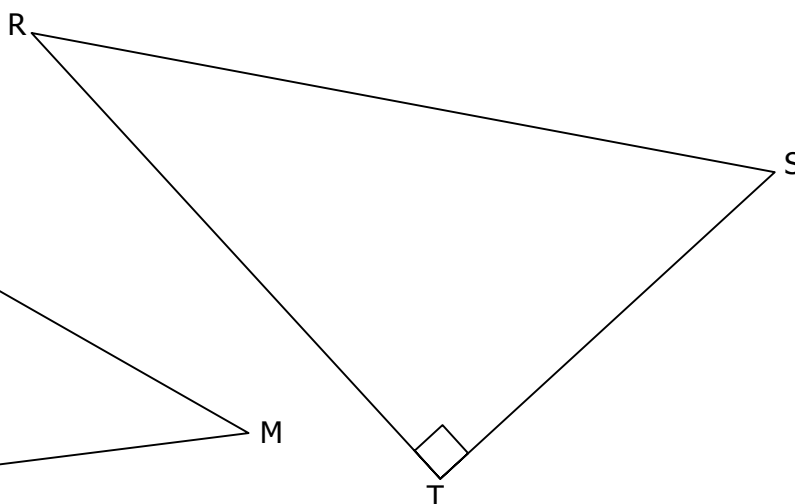
DE =	DE ² =
DF =	DF ² =
EF =	EF ² =



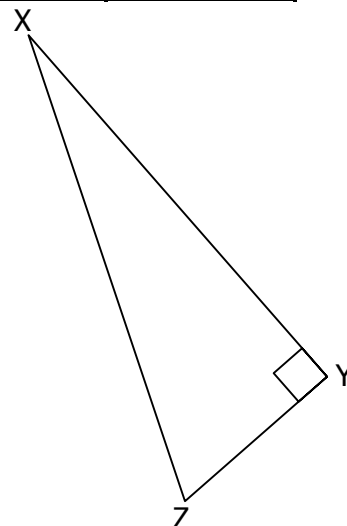
IJ =	IJ ² =
IK =	IK ² =
JK =	JK ² =



LM =	LM ² =
LN =	LN ² =
MN =	MN ² =



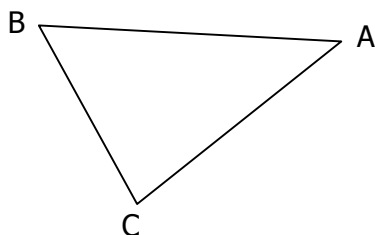
RS =	RS ² =
RT =	RT ² =
ST =	ST ² =



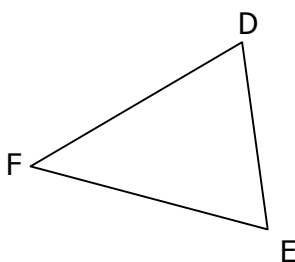
XY =	XY ² =
XZ =	XZ ² =
YZ =	YZ ² =

ACTIVITÉ 1.2

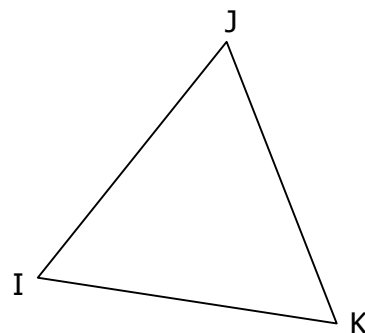
Même question que **ACTIVITÉ 1.1**



AB =	AB ² =
AC =	AC ² =
BC =	BC ² =



DE =	DE ² =
DF =	DF ² =
EF =	EF ² =



IJ =	IJ ² =
IK =	IK ² =
JK =	JK ² =