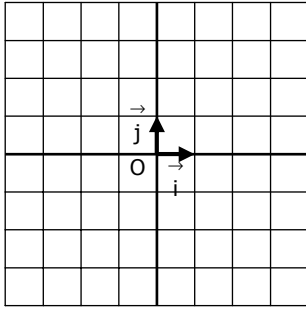


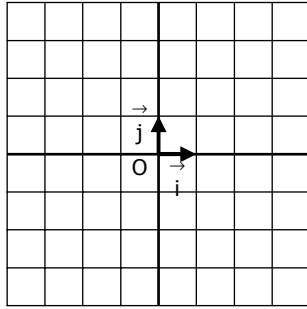
Construire la droite représentant chaque fonction affine :

1.



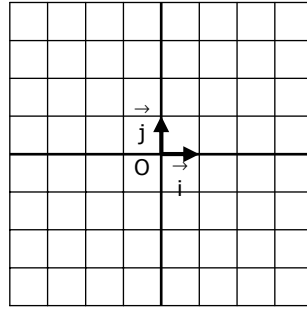
$$f(x) = 2x + 1$$

2.



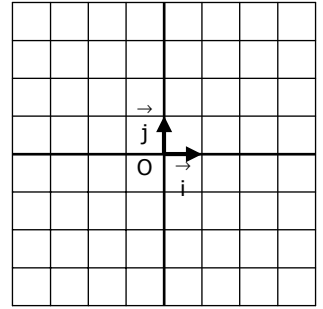
$$f(x) = -x + 3$$

3.



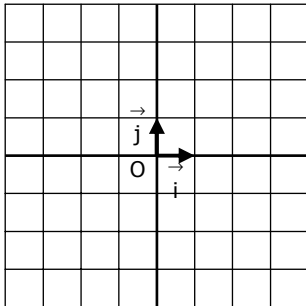
$$f(x) = 2x - 3$$

4.



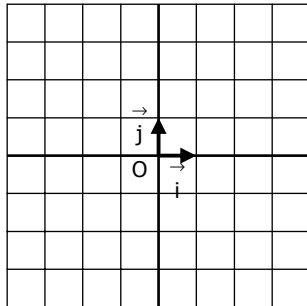
$$f(x) = x - 2$$

5.



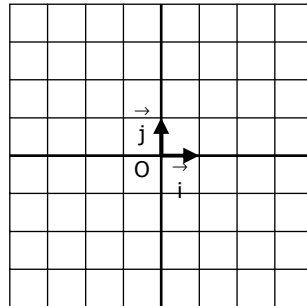
$$f(x) = 3x$$

6.



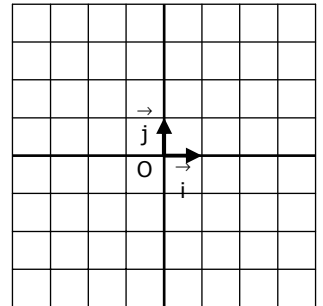
$$f(x) = -4x + 3$$

7.



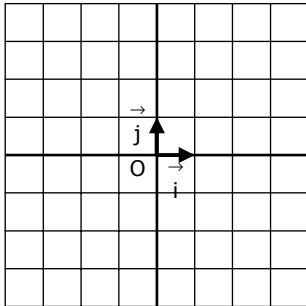
$$f(x) = -2x - 3$$

8.



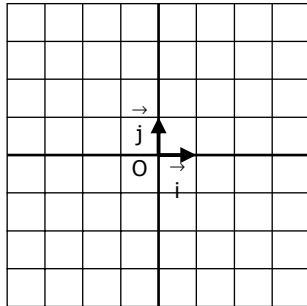
$$f(x) = 5x - 4$$

9.



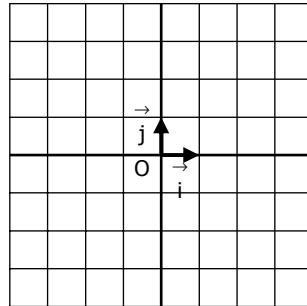
$$f(x) = -4x - 4$$

10.



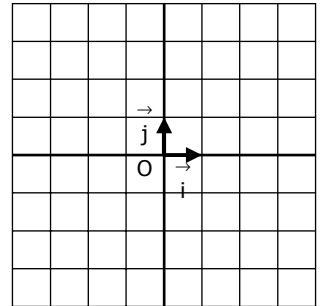
$$f(x) = \frac{1}{2}x$$

11.



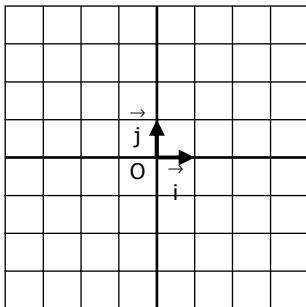
$$f(x) = \frac{3}{2}x - 2$$

12.



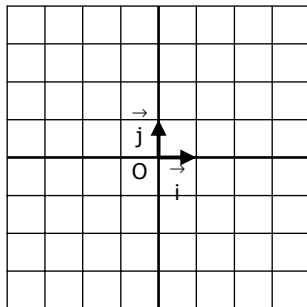
$$f(x) = -\frac{1}{2}x + 1$$

13.



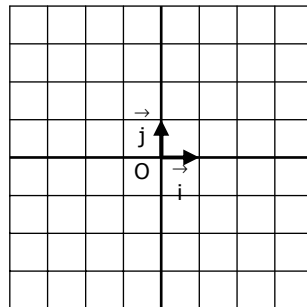
$$f(x) = \frac{2}{3}x - 1$$

14.



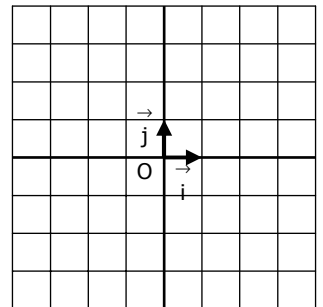
$$f(x) = -\frac{5}{4}x + 4$$

15.



$$f(x) = -\frac{4}{3}x + 1$$

16.



$$f(x) = x \mapsto 3$$